

Summer Work Packet for MPH Math Classes

**Students going into
AP Calculus AB
Sept. 2021**

Name: _____

This packet is designed to help students stay current with their math skills and be prepared for an **ADVANCED PLACEMENT course.**

Each math class expects a certain level of number sense, algebra sense, and graph sense in order to be successful in the course. These problems need to be completed by September 13th. Be sure to show all work. We will check this assignment in class.

If you have any questions, please email me at dmeehan@mphschool.org. Have a wonderful summer! I'm looking forward to seeing you all in AP Calculus.

The TI 84⁺ calculator is required for use in AP Calculus. It does everything you are allowed to use it for on the AP Exam.

.....

AP CALCULUS AB

Please read the following book, LITTLE BOOK OF BIG IDEAS: Pre-calculus The Power of Functions, by Lin McMullin. (See me for the book if you don't have a copy already.) Be sure to show your work and explain in complete sentences as needed. Be neat and organized. If you do 2 pages of problems a week (about one question per day), or 2 topics per week, you should be done by the start of classes in September. This is all to help you be prepared for the expectations of the AP course and exam.

READ:

Introduction

Chapter 1

Chapter 2 p. 11-16 (sec. 1 & 2 only)

Chapter 3

Chapter 4

Chapter 5

Chapter 6

Appendix: Polynomial, rational, exponential, logarithmic, trigonometric functions, inverse trig functions, reference angles

DO: Attached Activities

***Functions & Graphs**

***Rational Functions**

***Rate of Change**

***Brick on a Spring**

***Algebraic Expressions**

***Graphing Trig & Inverse Trig Functions**

***Inverse Trig Reference Angles**

***Triangle Trigonometry**

***Solving Trig Equations**

***Angle Formulas**

***Rational Functions**

***Rate of Change**

***Flash Cards**

Put all graphs on graph paper. Be sure to label the scale on each axis.

1. Are the functions the same? Explain your decision.

a. $f(x) = \frac{1}{\sqrt{x-3}}$ and $g(x) = \frac{\sqrt{x-3}}{x-3}$

b. $f(x) = \sqrt{x-3}$ and $g(x) = \frac{x-3}{\sqrt{x-3}}$

2. Graph $f(x) = |x|$.

a. Graph the **slope** of $f(x) = |x|$.

b. Write a piecewise function that is equivalent to $f(x)$.

c. Graph $g(x) = \frac{x}{|x|}, x \neq 0$.

d. Write a piecewise function that is equivalent to $g(x)$ that does not use absolute value.

e. Graph $h(x) = x|x|$.

f. Write a piecewise function that is equivalent to $h(x)$ that does not use absolute value.

3. Graph $j(x) = \llbracket x \rrbracket$. ($j(x)$ is the greatest integer less than or equal to x .)
- As x approaches -1 from the left, what does $j(x)$ approach? ($x \rightarrow -1^-$, $j(x) \rightarrow \underline{\hspace{2cm}}$)
 - As x approaches -1 from the right, what does $j(x)$ approach? ($x \rightarrow -1^+$, $j(x) \rightarrow \underline{\hspace{2cm}}$)
 - As x approaches 0 from the left, what does $j(x)$ approach? ($x \rightarrow 0^-$, $j(x) \rightarrow \underline{\hspace{2cm}}$)
 - As x approaches 0 from the right, what does $j(x)$ approach? ($x \rightarrow 0^+$, $j(x) \rightarrow \underline{\hspace{2cm}}$)
 - As x approaches 1 from the left, what does $j(x)$ approach? ($x \rightarrow 1^-$, $j(x) \rightarrow \underline{\hspace{2cm}}$)
 - As x approaches 1 from the right, what does $j(x)$ approach? ($x \rightarrow 1^+$, $j(x) \rightarrow \underline{\hspace{2cm}}$)
 - How would describe the general results?

4. Graph $k(x) = \frac{3x^2 - 6x}{x^2 - 25}$. State the domain. Discuss its vertical and horizontal asymptotes.

5. Graph $l(x) = \frac{x\sqrt{x^2 - 4x + 4}}{x - 2}$. State the domain. Discuss its vertical and horizontal asymptotes.

6. Write an equation of a function that has a removable discontinuity (hole) at the point $(1, 3)$.

7. Graph $m(x) = \cos(x)$ in the interval $[-2\pi, 2\pi]$.

a. For what values of x is $m(x)$ increasing?

b. For what values of x is $m(x)$ decreasing?

8. Graph $n(x) = \csc(x)$ in the interval $[-2\pi, 2\pi]$.

a. For what values of x is $n(x)$ concave up (like a cup)?

b. For what values of x is $n(x)$ concave down (like a frown)?

9. Given $p(x) = a(x - r_1)(x - r_2)(x - r_3)(x - r_4)\dots(x - r_n)$ and $n \in \mathbb{Z}$. What are the roots of $p(x)$? Discuss the end behavior (as $x \rightarrow \infty$ and $x \rightarrow -\infty$) of the function. Be sure to consider odd and even values of n , and the role of the coefficient, a .

10. Discuss the end behavior (as $x \rightarrow \infty$ and $x \rightarrow -\infty$) of the function. Be sure to consider different values of b .
- Given $q(x) = b^x$, $x \in R$; $b > 0$.
 - Given $r(x) = \log_b(x)$, $x \in R$; $b > 0$.
11. On your **calculator**, graph $s(x) = x + 2\cos(x)$ in the window $[-4\pi, 4\pi]$ by $[-20, 20]$. Discuss the interesting aspects of the function.
12. Let $f(x) = 2^x$ and $g(x) = \sqrt{x}$.
- Write the domain of $f(x)$ and $g(x)$.
 - Compare the domains of $f(g(x))$ and $g(f(x))$.

13. Let $f(x) = |x|$ and $g(x) = \sin(x)$.

a. Graph $f(g(x))$ and $g(f(x))$ on graph paper.

b. Write a brief explanation of why each graph is the way it is.

14. If $f(-x) = -f(x)$, then the function is ODD, symmetric to the origin, and both $A(x, y)$ and $B(-x, -y)$ are on the graph.

If $f(-x) = f(x)$, then the function is EVEN, symmetric to the y-axis, and both $A(x, y)$ and $B(-x, y)$ are on the graph.

On your **calculator**, graph the following functions and determine whether each is odd, even, or neither.

a. $y = \sin(x)$ ODD EVEN NEITHER

b. $y = \cos(x)$ ODD EVEN NEITHER

c. $y = \tan(x)$ ODD EVEN NEITHER

d. $y = \cot(x)$ ODD EVEN NEITHER

e. $y = \sec(x)$ ODD EVEN NEITHER

f. $y = \csc(x)$ ODD EVEN NEITHER

15. Definition: If $f(g(x)) = g(f(x)) = x$, then $f(x)$ and $g(x)$ are INVERSE functions.

Their graphs are symmetrical to the line $y = x$.

$$g(x) = f^{-1}(x).$$

If (a, b) is a point on $f(x)$, then (b, a) is a point on $f^{-1}(x)$.

Use this definition to determine, algebraically, if the functions are inverses.

a. $f(x) = \frac{1}{2}x + 4$; $g(x) = 2x - 8$

b. $f(x) = x^2$; $g(x) = \sqrt{x}$

16. Find the inverse function of $f(x) = \frac{1}{x}$.

GIVEN: $p(x) = x^2 - 1$ and $q(x) = x^3 + 1$

1. Graph $W(x) = \frac{p(x)}{q(x)}$ on graph paper. (Calculator window: Z4 to start)

2. Graph $Z(x) = \frac{q(x)}{p(x)}$ on graph paper. (Calculator window: Z4 to start)

3. Adjust your window as necessary. Check the table values. For each function, find the domain, range, end behavior model, end behavior asymptote, vertical asymptote(s), hole(s), local/absolute maximum(s) & minimum(s), and real root(s).

W(x) =	Z(x) =
Window:	Window:
Domain:	Domain:
Range:	Range:
Vertical Asymptote(s):	Vertical Asymptote(s):
Holes:	Holes:
End Behavior Model:	End Behavior Model:
End Behavior Asymptote:	End Behavior Asymptote:
Relative Maximum(s):	Relative Maximum(s):
Relative Minimum(s):	Relative Minimum(s):
Real Roots:	Real Roots:

1. **GIVEN:** $P(x) = 2x^3 - 3x^2 + 4x - 5$

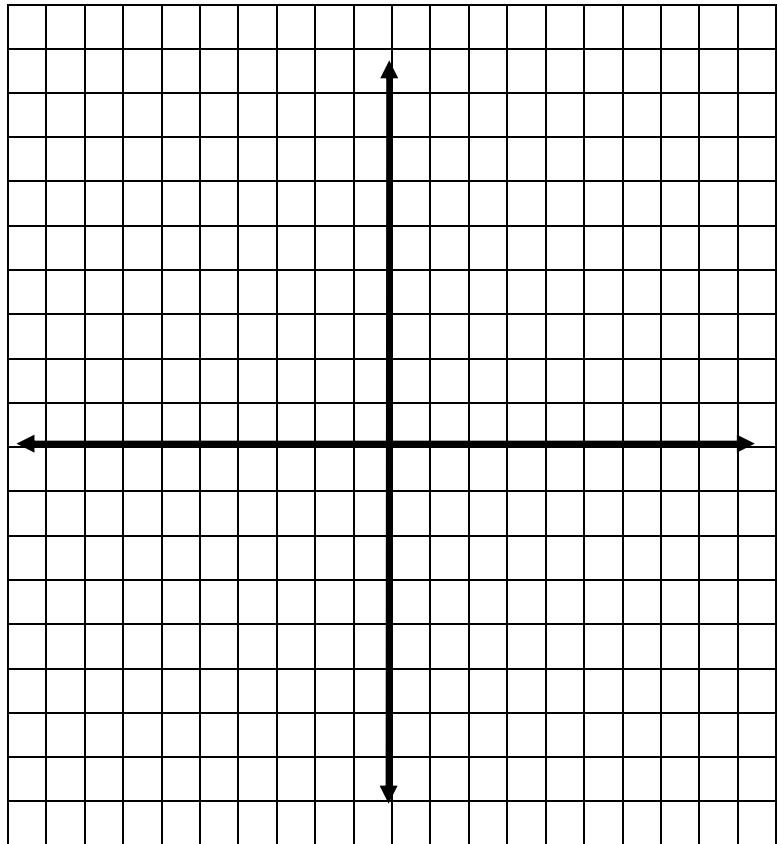
Using the difference quotient and $h = 0$, find the equation of the

A) velocity function, and

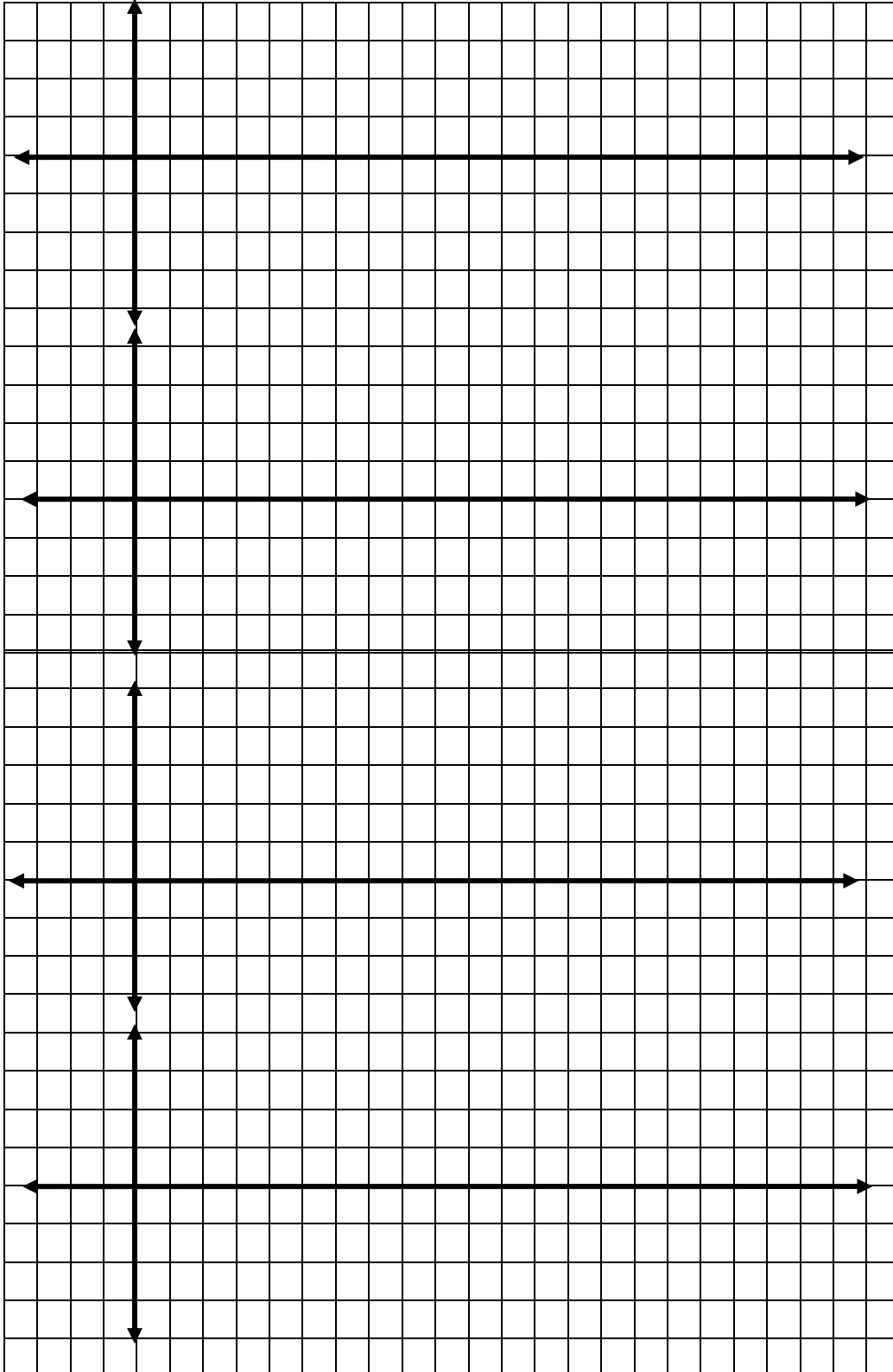
B) acceleration function, algebraically.

2. Using the slope function and the table on your calculator, find the equation of the velocity function. Sketch the graphs of both functions below. State the domain.

GIVEN: $P(x) = \ln(x)$



3. **GIVEN: $P(x) = \sin(x)$** Using the slope function on your calculator, find the equation of the
- A) velocity function,
 - B) acceleration function, and
 - C) jerk function.
 - D) Sketch the graphs of all four functions below from $[0, 2\pi]$.
Use 6 blocks = π for the scale on the x-axis and 2 blocks = 1 for the y-axis.



$P(x) = \sin(x)$

$V(x) = \underline{\hspace{2cm}}$

$A(x) = \underline{\hspace{2cm}}$

$J(x) = \underline{\hspace{2cm}}$

A brick is suspended on a spring and hangs at rest. The brick is pushed up a distance of 3 cm from its resting position. The brick is released at time $t = 0$ and allowed to oscillate.

1. Sketch a **diagram** of the brick bouncing to illustrate the ideal (never ending) situation.

2. The brick reaches its resting position after one second. Create a table that shows the position of the brick versus the time for the first 10 seconds in an ideal situation. Be sure to specify where the brick will be at zero seconds.

seconds	0	1	2	3	4	5	6	7	8	9	10
cm											

3. Create a graph (**on graph paper**) that models the motion of the brick in terms of time. Be sure to label the graph and axes.

Use your graph to answer questions 4-9.

4. Where is the function increasing? _____

Where is it decreasing? _____

5. What are the maximum values of the function? _____

Where do they occur? _____ Label these points on the graph.

6. Interpret the maximum values in terms of the original physical situation.

7. What would be a reasonable domain for the function? _____

What range would correspond to this domain? _____

8. Find an equation to describe this motion.

9. Would you expect the brick to oscillate forever in real life? Explain.

13. Suppose the spring is replaced with a less bouncy spring. The brick is pushed up a distance of 6 cm from its resting position, but now takes 2 seconds to reach its resting position.
- Sketch a **diagram** illustrating the new situation.
 - If the brick now reaches its resting position after one second, draw the graph (**on graph paper**). Be sure to label the graph and axes.
 - Write the new equation.

seconds	0	2	4	6	8	10	12	14	16	18
cm										

14. Use the slope function on your calculator to find a graph of the rate of change for the brick's position function. Sketch the rate graph (**on graph paper**) and find its **equation**.

15. Compare the position and rate of change (slope) graphs from question 10 & 11 to those in questions 13 & 14. State the changes and explain.

Simplify completely. Show your work.

$$1. \left(\frac{x^2 + x}{x^2 - 4} \div \frac{x^2 - 1}{x^2 + 5x + 6} \right) - \frac{4}{x^2 + 3x - 4}$$

$$2. \frac{4 - (1 - w)^{-1}}{16 + 7(w^2 - 1)^{-1}}$$

$$3. \frac{25d^{-7/2} j^{8/3}}{15d^{3/2} j^{-2/3}}$$

$$4. \frac{\sqrt{x} - \sqrt{3}}{\sqrt{x} + \sqrt{3}}$$

Solve for x. Check your answers.

$$5. 2x^{\frac{2}{3}} + 7x^{\frac{1}{3}} - 15 = 0$$

a) $y = \sin(\theta)$ if and only if $\theta = \sin^{-1}(y)$.

So, $f^{-1}(x) = \sin^{-1}(x) = \theta$ (the angle)

The domain of $f(\theta) = \sin(\theta)$ is all REAL numbers: $\theta \in \mathbb{R}$.

The range of $f(\theta)$ is $-1 \leq f(\theta) \leq 1$.

The **domain** of the inverse function is $-1 \leq x \leq 1$.

The **range** of the inverse function is **limited**.

$$\frac{-\pi}{2} \leq f^{-1}(x) \leq \frac{\pi}{2} \quad \text{OR} \quad \frac{-\pi}{2} \leq \theta \leq \frac{\pi}{2}$$

b) $y = \cos(\theta)$ if and only if $\theta = \cos^{-1}(y)$.

So, $f^{-1}(x) = \cos^{-1}(x) = \theta$ (the angle)

The domain of $f(\theta) = \cos(\theta)$ is all REAL numbers: $\theta \in \mathbb{R}$.

The range of $f(\theta)$ is $-1 \leq f(\theta) \leq 1$.

The **domain** of the inverse function is $-1 \leq x \leq 1$.

The **range** of the inverse function is **limited**.

$$0 \leq f^{-1}(x) \leq \pi \quad \text{OR} \quad 0 \leq \theta \leq \pi$$

c) $y = \tan(\theta)$ if and only if $\theta = \tan^{-1}(y)$.

So, $f^{-1}(x) = \tan^{-1}(x) = \theta$ (the angle)

The domain of $f(\theta) = \tan(\theta)$

is all REAL numbers excluding $\{ \dots -3\pi/2, -\pi/2, \pi/2, 3\pi/2, 5\pi/2, \dots \}$ or

$\theta \neq (2k+1)\pi/2$ where k is an integer.

The range of $f(\theta)$ is all REAL numbers.

The **domain** of the inverse function is all REAL numbers.

The **range** of the inverse function is **limited**.

$$\frac{-\pi}{2} < f^{-1}(x) < \frac{\pi}{2} \quad \text{OR} \quad \frac{-\pi}{2} < \theta < \frac{\pi}{2}$$

1. Graph the following **on graph paper**, from $[-2\pi, 2\pi]$. Use 6 blocks = π for the scale on the x-axis and 2 blocks = 1 for the y-axis. Be sure to accurately plot common reference angle points ($x = \frac{\pi}{6}, \frac{\pi}{4}, \frac{\pi}{3}, \frac{\pi}{2}, \dots$). Draw all asymptotes.

a) $f(x) = \sin(x)$

d) $k(x) = \cot(x)$

b) $g(x) = \cos(x)$

e) $n(x) = \sec(x)$

c) $h(x) = \tan(x)$

f) $p(x) = \csc(x)$

2. Use your calculator and draw the **inverse functions** on the same axes as the original functions (from question #1). Pay attention to the **limited** range of each. Draw all asymptotes.

a) $y = \sin^{-1}(x)$ (alternate notation: $y = \arcsin(x)$)

b) $y = \cos^{-1}(x)$ (alternate notation: $y = \arccos(x)$)

c) $y = \tan^{-1}(x)$ (alternate notation: $y = \arctan(x)$)

3. Use the **unit circle** to give the angle measure of each trigonometric expression. Give your answer in **radian** measure using π (no calculator). Remember the quadrants (range) for which each **inverse** function is defined.

a) $\tan^{-1}(-\sqrt{3}/3) = \underline{\hspace{2cm}}$

g) $\cos^{-1}(-\sqrt{2}/2) = \underline{\hspace{2cm}}$

b) $\sin^{-1}(-1) = \underline{\hspace{2cm}}$

h) $\cos^{-1}(1) = \underline{\hspace{2cm}}$

c) $\cos^{-1}(1/2) = \underline{\hspace{2cm}}$

i) $\sin^{-1}(\sqrt{3}/2) = \underline{\hspace{2cm}}$

d) $\sin^{-1}(-\sqrt{3}/2) = \underline{\hspace{2cm}}$

j) $\cos^{-1}(-1/2) = \underline{\hspace{2cm}}$

e) $\cos^{-1}(0) = \underline{\hspace{2cm}}$

k) $\tan^{-1}(\sqrt{3}) = \underline{\hspace{2cm}}$

f) $\sin^{-1}(1) = \underline{\hspace{2cm}}$

l) $\tan^{-1}(1) = \underline{\hspace{2cm}}$

m) $\cos^{-1}(-1) = \underline{\hspace{2cm}}$

r) $\tan^{-1}(\sqrt{3}/3) = \underline{\hspace{2cm}}$

n) $\sin^{-1}(-1/2) = \underline{\hspace{2cm}}$

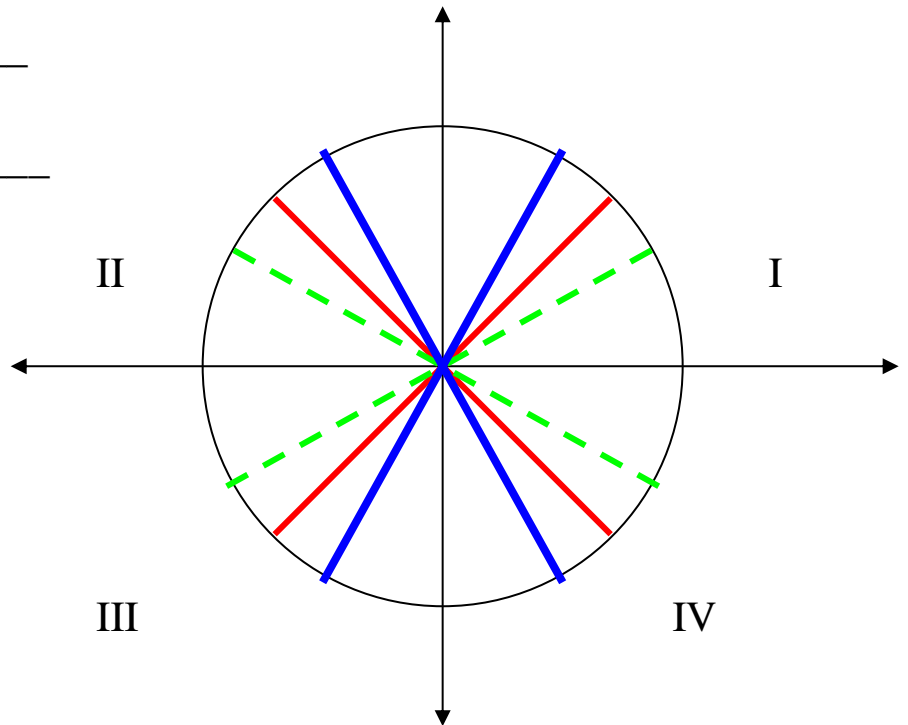
s) $\tan^{-1}(1) = \underline{\hspace{2cm}}$

o) $\tan^{-1}(-1) = \underline{\hspace{2cm}}$

t) $\cos^{-1}(-\sqrt{3}/2) = \underline{\hspace{2cm}}$

p) $\tan^{-1}(-\sqrt{3}) = \underline{\hspace{2cm}}$

q) $\cos^{-1}(\sqrt{3}/2) = \underline{\hspace{2cm}}$



4. A. If $\cos^{-1}\left(-\frac{7}{25}\right) = \theta$ in Quadrant II, find: B. If $\tan^{-1}(\sqrt{6}) = \alpha$ in Quadrant I, find:
(No calculator. Hint: Draw a right triangle for each.)

a) $\sin(\theta) =$ _____

a) $\sin(\alpha) =$ _____

b) $\cos(\theta) =$ _____

b) $\cos(\alpha) =$ _____

c) $\tan(\theta) =$ _____

c) $\tan(\alpha) =$ _____

d) $\cot(\theta) =$ _____

d) $\cot(\alpha) =$ _____

e) $\sec(\theta) =$ _____

e) $\sec(\alpha) =$ _____

f) $\csc(\theta) =$ _____

f) $\csc(\alpha) =$ _____

5. Using the information $(a)(b) = 0$ if and only if $a = 0$ or $b = 0$, solve the following equation in the interval $[0, 2\pi)$. (No calculator.)

$$2\cos(x) \sin(x) - \sin(x) = 0$$

6. Any point on the **unit circle** has the coordinates $(\cos(\theta), \sin(\theta))$, so $x = \cos(\theta)$ and $y = \sin(\theta)$.

From the Pythagorean theorem, $x^2 + y^2 = r^2$ and substituting for x and y , then **$\sin^2(\theta) + \cos^2(\theta) = 1$** .

Using the following identities, solve the equations for x in the interval $[0, 2\pi)$. (No calculator.)

Pythagorean Identity: **$\sin^2(x) + \cos^2(x) = 1 \rightarrow 1 - \sin^2(x) = \cos^2(x)$** OR **$1 - \cos^2(x) = \sin^2(x)$**

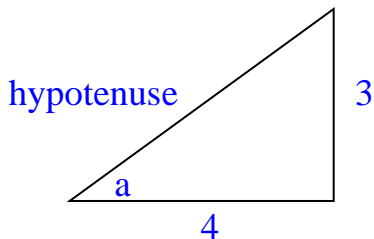
a. Solve for x , $[0, 2\pi)$: $\sin^2(x) - \cos^2(x) = 0$

b. Solve for x , $[0, 2\pi)$: $2\sin(x)\tan(x) + \tan(x) - 2\sin(x) - 1 = 0$ (factor by grouping)

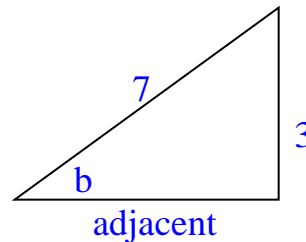
Use the formulas given on the next page to calculate the value of the given expressions on the following pages **exactly** (no calculator). Follow the examples.

GIVEN: $\tan(a) = \frac{3}{4}$ and $\csc(b) = \frac{7}{3}$, in Quadrant I, find $\cos(a - b)$, $\tan(2b)$ & $\cos(\frac{1}{2}a)$.

Using a right triangle (or the Pythagorean Identity), find the values of the other trig functions.



$$\begin{aligned} \text{hyp}^2 &= 3^2 + 4^2 \\ \text{hyp} &= 5 \end{aligned}$$



$$\begin{aligned} 3^2 + \text{adj}^2 &= 7^2 \\ \text{adj} &= 2\sqrt{10} \end{aligned}$$

From the first triangle, $\sin(a) = \frac{3}{5}$ and $\cos(a) = \frac{4}{5}$ and $\tan(a) = \frac{3}{4}$.

From the second triangle, $\sin(b) = \frac{3}{7}$ and $\cos(b) = \frac{2\sqrt{10}}{7}$ and $\tan(b) = \frac{3\sqrt{10}}{20}$.

FIND: $\cos(a - b)$, using the formula, $\cos(a - b) = \cos(a)\cos(b) + \sin(a)\sin(b)$.

$$\begin{aligned} \text{Substitute into the formula and simplify.} \quad \cos(a - b) &= \cos(a)\cos(b) + \sin(a)\sin(b) \\ &= (4/5)(2\sqrt{10}/7) + (3/5)(3/7) \\ &= (8\sqrt{10} + 9)/35 \end{aligned}$$

FIND: $\tan(2a)$, using the formula, $\tan(2a) = \frac{2\tan(a)}{1 - \tan^2(a)}$.

$$\begin{aligned} \tan(2a) &= \frac{2\tan(a)}{1 - \tan^2(a)} \\ &= \frac{2(\frac{3}{4})}{1 - (\frac{3}{4})^2} = \frac{24}{7} \end{aligned}$$

FIND: $\cos(\frac{1}{2}b)$, using the formula $\cos(\frac{1}{2}b) = \pm\sqrt{\frac{1 + \cos(b)}{2}}$.

$$\cos(\frac{1}{2}b) = \sqrt{\frac{1 + \frac{2\sqrt{10}}{7}}{2}} = \sqrt{\frac{7 + 2\sqrt{10}}{14}} \quad (\text{Okay to leave in this form.})$$

Sum & difference of angles formulas:

$$(a + b) = \sin(a)\cos(b) + \cos(a) \sin(b) \qquad \sin(a - b) = \sin(a)\cos(b) - \cos(a) \sin(b)$$

$$\cos(a + b) = \cos(a)\cos(b) - \sin(a) \sin(b) \qquad \cos(a - b) = \cos(a)\cos(b) + \sin(a) \sin(b)$$

$$\tan(a + b) = \frac{\tan(a) + \tan(b)}{1 - \tan(a)\tan(b)} \qquad \tan(a - b) = \frac{\tan(a) - \tan(b)}{1 + \tan(a)\tan(b)}$$

Double angle formulas:

$$\sin(2a) = 2\sin(a) \cos(a) \qquad \cos(2a) = \cos^2(a) - \sin^2(a) \qquad \tan(2a) = \frac{2 \tan(a)}{1 - \tan^2(a)}$$

Half angle formulas

$$\sin(1/2a) = \pm \sqrt{\frac{1 - \cos(a)}{2}} \qquad \cos(1/2a) = \pm \sqrt{\frac{1 + \cos(a)}{2}} \qquad \tan(1/2a) = \pm \sqrt{\frac{1 - \cos(a)}{1 + \cos(a)}}$$

(The sign is determined by the quadrant.)

Sometimes these forms are more convenient:

$$\sin^2(a) = \frac{1 - \cos(2a)}{2} \qquad \cos^2(a) = \frac{1 + \cos(2a)}{2}$$

(Note: These are still half angle formulas.)

The ones in **red** are used most often in AP Calculus.

<http://www.themathpage.com/atrig/trigonometric-identities.htm#double>

Use this link to find the proof and explanation of the trigonometric identities above.

GIVEN: $\tan(a) = \frac{2}{5}$ in Quadrant III and $\cos(b) = -\frac{4}{9}$ in Quadrant II

1. Set up the right triangles for $\angle a$ and $\angle b$. Find the lengths of the missing side.

2. $\sin(a - b)$

3. $\cos(a + b)$

4. $\sin(2b)$

5. $\cos(2a)$

6. $\sin(\frac{1}{2}a)$

7. $\cos(\frac{1}{2}b)$

Parent Functions & Transformations

Name _____

Create a deck of cards for matching. You will need to know these graphs.

- A) Write the parent function (column 1 below) on the first card.
- B) State its domain and range on a second card.
- C) Draw its graph on a third card. (You can get index cards with a grid on them if you want!)
- D) Write the transformation described (column 2 below) on a fourth card.
- E) Draw the graph for the transformation described on a fifth card.
- F) Write the equation for the transformation described on a sixth card.

You will need 84 cards total. **Use a different color for each group A-F.**

Parent Functions

1. $f(x) = x$

2. $f(x) = |x|$

3. $f(x) = \lfloor x \rfloor$

4. $f(x) = x^2$

5. $f(x) = x^3$

6. $f(x) = \frac{1}{x}$

7. $f(x) = \sqrt{x}$

8. $f(x) = e^x$

9. $f(x) = \frac{1}{2}^x$

10. $f(x) = \ln(x)$

11. $f(x) = \sin(x)$ from $[0, 2\pi]$

12. $f(x) = \cos(x)$ from $[0, 2\pi]$

13. $f(x) = \tan(x)$ from $[0, 2\pi]$

14. $x^2 + y^2 = 1$

Transformations

Vertical shrink of $\frac{1}{2}$.

Horizontal shift left 2, vertical stretch of 2

Vertical shift down 1

Vertical stretch of 3

Horizontal shift right 3

Horizontal shift right 2, vertical shift up 1

Horizontal shift right 2

Vertical stretch of 2

Vertical stretch of 4, vertical shift down 1

Horizontal shift left 4

Horizontal shrink of 2, vertical stretch of 2

Horizontal stretch of 2, vertical shrink of $\frac{1}{2}$

Reflection over the x axis

Horizontal shift right 1, vertical shift down 1